



Family Circle

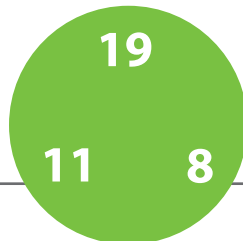
Each circle has three numbers that make up a **fact family**. Add and subtract using each fact family to fill in the blanks.




$9 + 8 = 17$
$8 + 9 = 17$
$17 - 8 = 9$
$17 - 9 = 8$



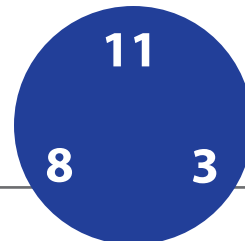
+	=
+	=
-	=
-	=




+	=
+	=
-	=
-	=




+	=
+	=
-	=
-	=




+	=
+	=
-	=
-	=



+	=
+	=
-	=
-	=



+	=
+	=
-	=
-	=



+	=
+	=
-	=
-	=