



Circus Math

How many of each picture do you see? Add them up and write the number in the box!

1




+

1




=

2




+

2



=

2



+

1



=