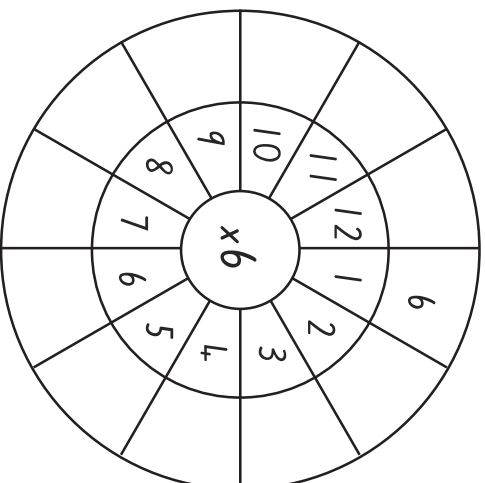


Level 3 Maths Mat

Lucia is going to bake a cake but she has realised that she does not have enough of some ingredients. Fill in the table with how much more Lucia will need to complete the recipe:

	Has	Needs	Recipe
Flour	100g		400g
Sugar	200g		350g
Eggs	3		5
Butter	3 tbsp		7 tbsp
Baking powder	1 tsp		3 tsp
Raisins	50g		120g

Complete this multiplication wheel:




Use each number only once to solve these subtraction equations:


- 1 2 3 4 5 6 7 8 9

$17 - \underline{\quad} = 8$
 $13 - \underline{\quad} = 5$
 $15 - \underline{\quad} = 10$
 $\underline{\quad} - 6 = 1$

Shade $\frac{2}{5}$ of the counters.



Shade $\frac{5}{8}$ of the grid.




Use the doubling and halving strategy to solve these problems. Show your doubling and halving working out.

$2 \times 14 =$
 $18 \times 4 =$
 $10 \times 4 =$

The time on the clock is _____ past _____.

This time is the same as _____.



Each child brought fruit to school.

Fruit	Number	Fruit	Number
Apple	8	Strawberries	2
Grapes	3	Plums	4
Feijoa	3	Bananas	4

How many children brought fruit today? _____
 What type of fruit did $\frac{1}{3}$ of the children bring that day? _____