

Year 2: Maths Games 2



Missing Number

Fill in the missing number:

$$9 \times 2 = 18$$

Hide
Answers

Missing Number

Fill in the missing number:

$$3 \times 10 = 30$$

Hide
Answers

Missing Number

Fill in the missing number:

$$\boxed{7} \times 5 = 35$$

Hide
Answers

Missing Number

Fill in the missing number:

$$8 \div 2 = \boxed{4}$$

Hide
Answers

Missing Number

Fill in the missing number:

$$45 \div 5 = 9$$

Hide
Answers

Missing Number

Fill in the missing number:

50

$$\div 10 = 5$$

Hide
Answers

How Much?

How much money is there here?



Hide
Answers

How Much?


How much money is there here?



Hide
Answers

How Much?


How much money is there here?




Hide
Answers

Shopping


Sam buys two pieces of fruit. He **spends** exactly 50p. Which fruit does he buy?



20p



10p



30p




40p

either banana and pear **or** apple and grapes


Hide
Answers

Shopping


Sam buys three pieces of fruit. He **spends** exactly £1. Which fruit does he buy?



20p



30p



20p




40p

either 2 apples and grapes **or** 2 grapes and a banana **or** 2 grapes and a pear

Hide
Answers

Take Less than 50p

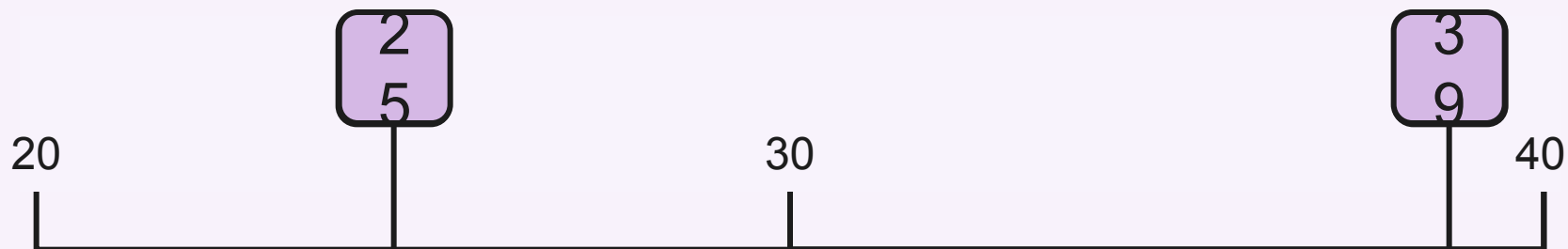
Mum tells Dan he can take any coin from her purse that is less than 50p.
Which coins can he take?



Hide
Answers

Number Line

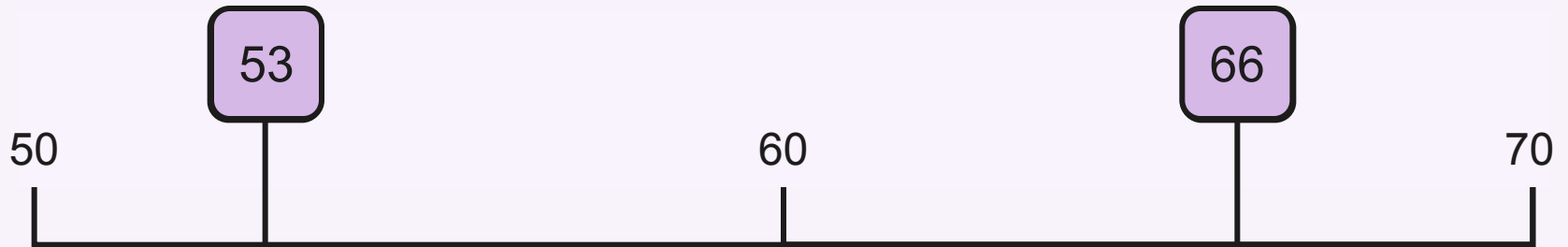
Write the number that would go in each box:



Hide
Answers

Number Line

Write the number that would go in each box:



Hide
Answers

Packs of Pencils



Mrs Jones wants 30 pencils for her class. There are 10 pencils in one pack. How many packs of pencils does she need?

3 packs

Hide
Answers

The Planet Zarg



Aliens from the Planet Zarg have three eyes each. How many eyes do 5 aliens have altogether?

15 eyes

Hide
Answers

The Book Shop



One book costs **£5**.
Sunil wants to buy **3** books.
He works out how much this will cost.
Which two calculations could he use?

$$5 + 3$$

$$5 + 5 + 5$$

$$3 \times 5$$

$$3 + 3 + 3$$

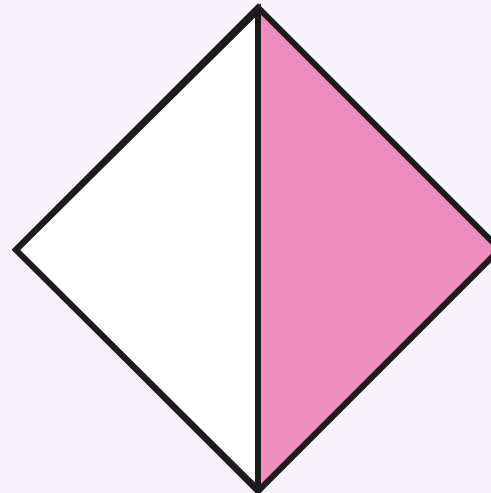
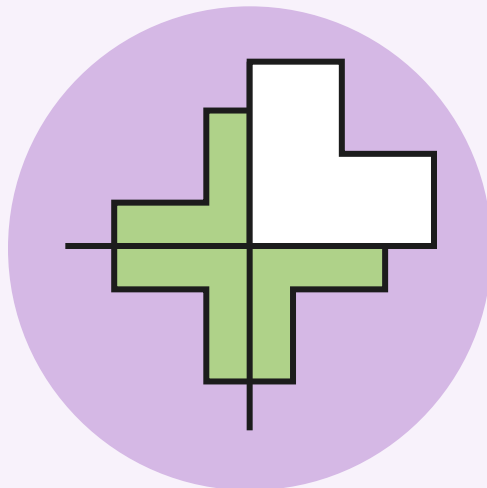


$$5 + 5 + 5$$

$$3 \times 5$$

Hide
Answers

Fractions of Shapes


Which shape has $\frac{3}{4}$ shaded?



Hide
Answers

Fractions

Calculate:



$\frac{1}{2}$ of

10
5

Hide
Answers


Fractions

Calculate:

$\frac{1}{4}$ of

12

3




Hide
Answers

Fractions

Calculate:

two quarters of eight

4




Hide
Answers

Fractions

Calculate:

$\frac{3}{4}$ of

16
12



Hide
Answers

What Number

I'm thinking of a number.
Half of my number is 8.
What is my number?

16

Hide
Answers



Word Problems

There are 18 wellies in the school cloakroom. How many children have brought wellies to school?



$$18 \div 2 = 9 \text{ children}$$

Hide
Answers

Word Problems

Matthew is sharing his grapes with Tom. He gives Tom half of his grapes. Tom has 10 grapes. How many grapes did Matthew have to begin with?



$$10 \times 2 = 20 \text{ grapes}$$

Hide
Answers

Word Problems

Maddie has 16 sweets. She gives one quarter of them to her little sister. How many sweets does Maddie have left?



$$16 \div 4 = 4 \text{ sweets}$$

$$16 - 4 = 12 \text{ sweets}$$

Hide
Answers

twinkl

