





Te Puna Whakaako - Tau

	Ngohe 1	Ngohe 2	Ngohe 3	Ngohe 4	Ngohe 5
E kaingākau ana ahau ki te tau	<p>Mataono - Pīroringia te mataono ka tatau koe i ngā ira</p> <p>Dice online</p> <p><i>Roll the dice and see what number you stop on. Count the dots in Te reo Maori. (Don't forget to push pause to stop the dice rolling)</i></p>  <p>C1: Mahi Whakatōpū Please make a copy into your own drive.</p>	<p>Tataungia i roto i te reo Māori. Ka taea e koe te tatau ki te 100?</p> <p>Māori numbers and counting - Ngā tau</p>  <p>How high can you count in Te Reo Māori?</p> <p>Challenge a friend or a family member.</p> <p>Papa Rau - Hundreds Boards</p>	<p>Hītokotoko</p> <p>Whakamahia te tioka kia tāngia e koe tētehi kēmu Hītokotoko!</p> <p>Hopscotch</p>  <p>Use chalk to write your numbers in Māori and count the numbers aloud as you jump into each space.</p>	<p>Whakaoti rapanga Tāpirihanga. Anei te rerenga mō te tāpiri: Tāpirihia te ___ ki te ___ ka rite ki te ___.</p> <p>Parakatihia i ngā rautaki kua ako i a ddkoe i roto i te akomanga.</p> <p>6 + 4 = 10</p> <p>Tāpirihia te whā ki te ono ka rite ki te tekau</p> <p>Work Sheet</p> <p>Complete some addition problems using the sentence provided.</p> <p>Extension:</p> <ol style="list-style-type: none"> Write the sums as a sentence Create your own sums 	<p>E whia ngā hīkoi mai i te kuaha matua o tō whare ki te.....?</p> <p>Tuhia ki tō puka ngohe mahi.</p> <p>Hei tauira: Pouaka reta, keti, te pou hiko pātata ki tō whare, tō ruma moe, te kauta, wāhi muri te whare.</p> <p>He mahi torohanga: Tā koe he mapi o tō whare me ngā wahi i hiko koe.</p>  <p>Count how many steps from the main door of your house to.....?</p> <p>Record your answers in the activity workbook.</p> <p>Suggestions: Mail box, gate, nearest power pole, bedroom, kitchen, backyard</p> <p>An extension mahi: Draw a map of your whare and where you walked to.</p>
	Kua tutuki i a ahau te mahi				
Te Rā: Ka tāmokongia e ngā Mātua:					