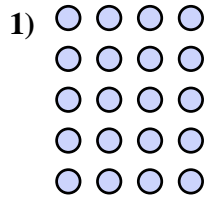
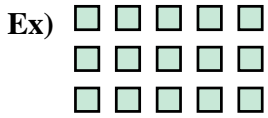


Write each group as repeated addition AND the times table it is then answer



Answers

Ex. $5+5+5$ or $3 \times 5 = 15$

1. _____

2. _____

3. _____

4. _____

5. _____

6. _____

7. _____

8. _____

9. _____


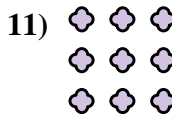
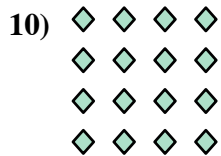
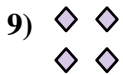



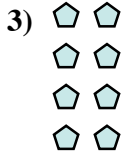
10. _____

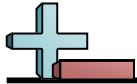
11. _____

12. _____


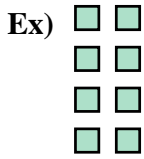
13. _____

14. _____





Write each group as repeated addition AND the times table it is then answer



Answers

Ex. **2+2+2+2 or 4x2 = 8**

1. _____

2. _____

3. _____

4. _____

5. _____

6. _____

7. _____

8. _____

9. _____


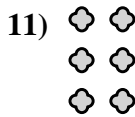
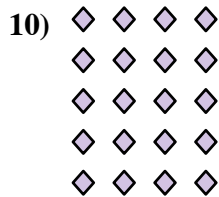



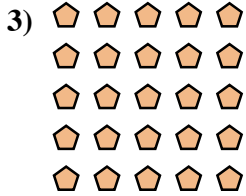
10. _____

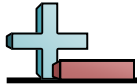
11. _____

12. _____



13. _____

14. _____





Write each group as repeated addition AND the times table it is then answer



Answers

Ex. 5+5 or 2x5 = 10

1. _____

2. _____

3. _____

4. _____

5. _____

6. _____

7. _____

8. _____

9. _____


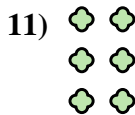
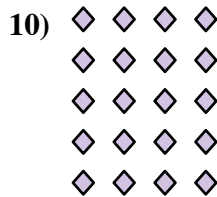
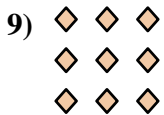
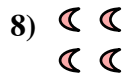
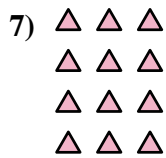


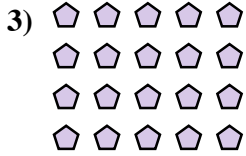
10. _____

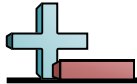
11. _____

12. _____


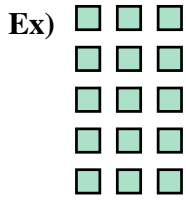
13. _____

14. _____





Write each group as repeated addition AND the times table it is then answer



Answers

Ex. $3+3+3+3+3$ or $5 \times 3 = 15$

1. _____

2. _____

3. _____

4. _____

5. _____

6. _____

7. _____

8. _____

9. _____

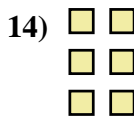

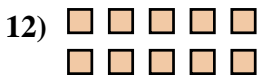
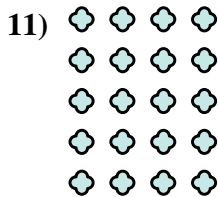

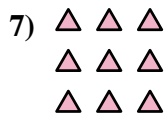
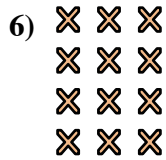

10. _____

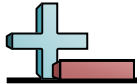
11. _____

12. _____

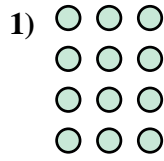
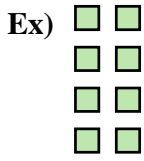
13. _____

14. _____





Write each group as repeated addition AND the times table it is then answer



Answers

Ex. **2+2+2+2 or 4x2 = 8**

1. _____

2. _____

3. _____

4. _____

5. _____

6. _____

7. _____

8. _____

9. _____


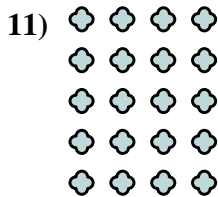


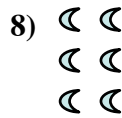
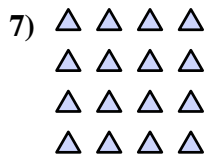

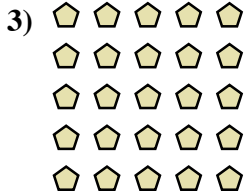
10. _____

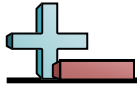
11. _____

12. _____

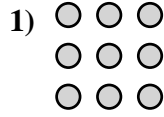
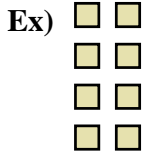
13. _____

14. _____





Write each group as repeated addition AND the times table it is then answer



Answers

Ex. **2+2+2+2 or 4x2 = 8**

1. _____

2. _____

3. _____

4. _____

5. _____

6. _____

7. _____

8. _____

9. _____

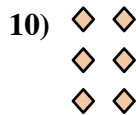
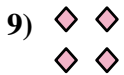



10. _____

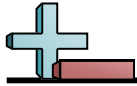
11. _____

12. _____


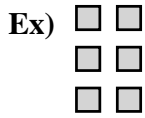
13. _____

14. _____





Write each group as repeated addition AND the times table it is then answer



Answers

Ex. $2+2+2$ or $3 \times 2 = 6$

1. _____

2. _____

3. _____

4. _____

5. _____

6. _____

7. _____

8. _____

9. _____


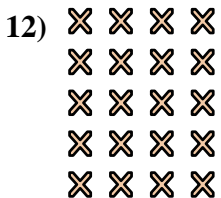
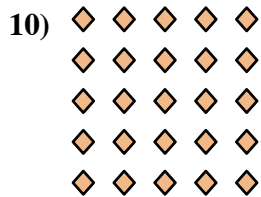


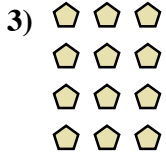
10. _____

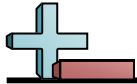
11. _____

12. _____


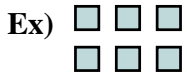
13. _____

14. _____





Write each group as repeated addition AND the times table it is then answer



Answers

Ex. **3+3 or 2x3 = 6**

1. _____

2. _____

3. _____

4. _____

5. _____

6. _____

7. _____

8. _____

9. _____

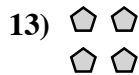
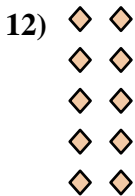
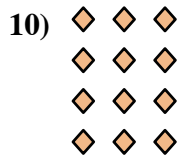
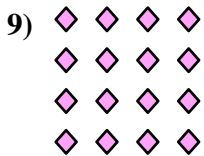

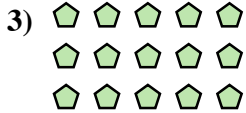
10. _____

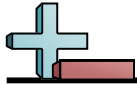
11. _____

12. _____

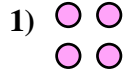
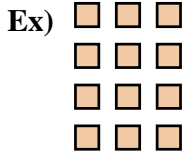
13. _____

14. _____





Write each group as repeated addition AND the times table it is then answer



Answers

Ex. 3+3+3+3 or 4x3 = 12

1. _____

2. _____

3. _____

4. _____

5. _____

6. _____

7. _____

8. _____

9. _____


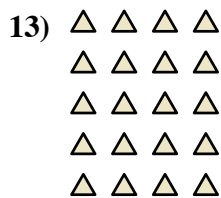
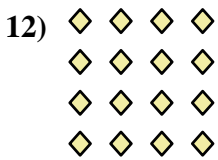
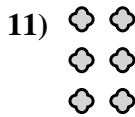
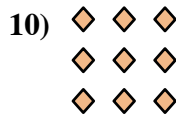




10. _____

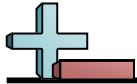
11. _____

12. _____

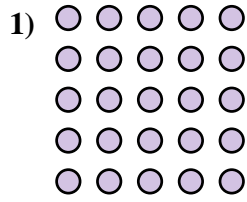
13. _____

14. _____





Write each group as repeated addition AND the times table it is then answer



Answers

Ex. $2+2$ or $2 \times 2 = 4$

1. _____

2. _____

3. _____

4. _____

5. _____

6. _____

7. _____

8. _____

9. _____

10. _____

11. _____

12. _____

13. _____

14. _____

